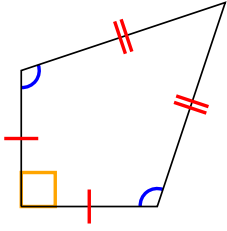





Determine if the shape shown is a Quadrilateral, Kite, Trapezoid, Parallelogram, Rhombus, Rectangle or Square (can be more than one).

Answers

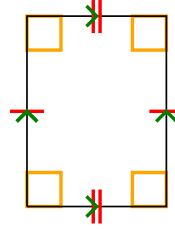
1)



2)



3)



1. _____

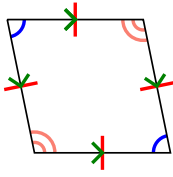
2. _____

3. _____

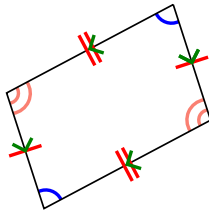
4. _____

5. _____

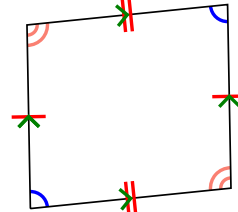
4)



5)



6)



6. _____

7. _____

8. _____

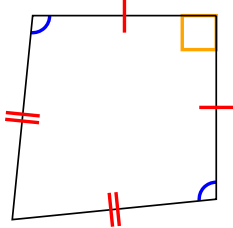
9. _____

10. _____

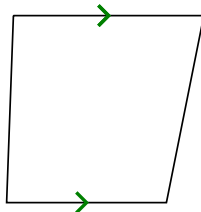
11. _____

12. _____

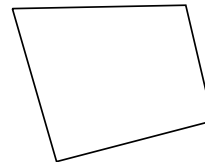
7)



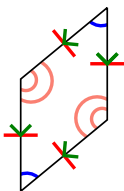
8)



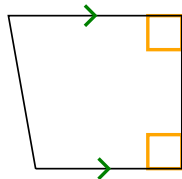
9)



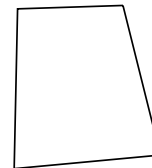
10)

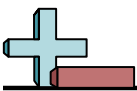


11)

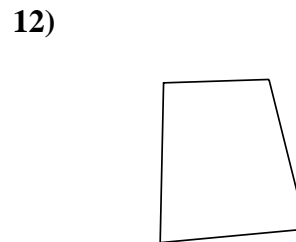
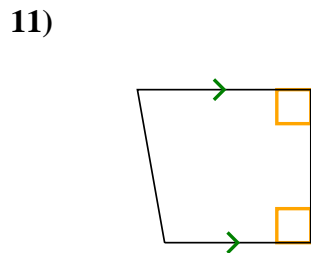
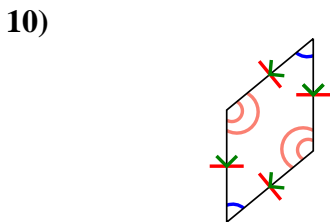
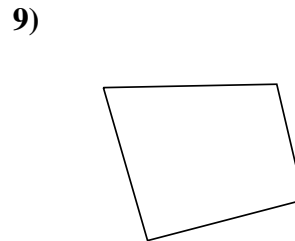
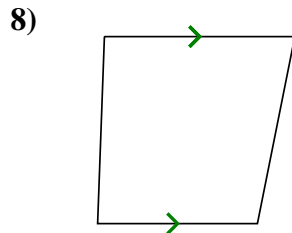
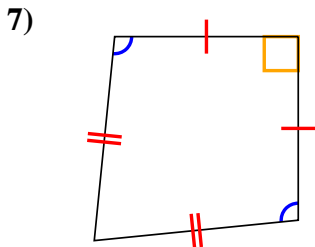
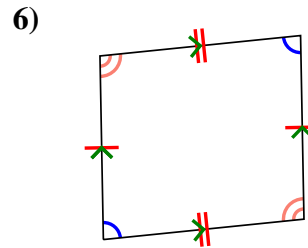
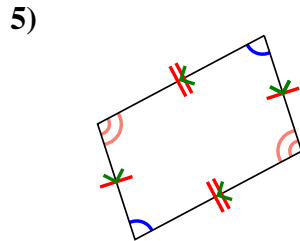
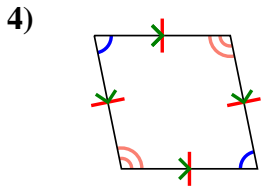
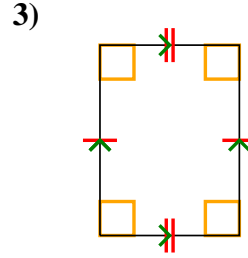
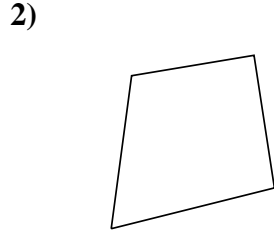
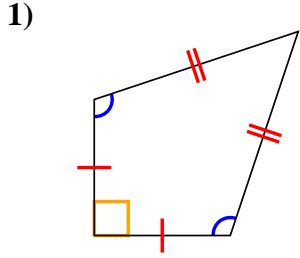


12)





Determine if the shape shown is a Quadrilateral, Kite, Trapezoid, Parallelogram, Rhombus, Rectangle or Square (can be more than one).



Answers

1. Q,K

2. Q

3. Q,P,R

4. Q,P,H

5. Q,P

6. Q,P

7. Q,K

8. Q,T

9. Q

10. Q,P,H

11. Q,T

12. Q